

Hulimavu, Bannerghatta Road, Bangalore – 76
Half Yearly Examination – 2018-19
Subject : MATHEMATICS

Name: _____

Roll No. _____

Date: 09-10- 2018

Time: 2 hrs 15mins

Class: II/ Sec: _____

Max. Marks: 50

I. Choose the correct answer and write:

[1x 5 = 5]

a. 1 hundred + 0 tens + 9 ones is _____. (190, 109, 909)

b. 100 more than 49 is _____. (149, 49, 409)

c. Half of 40 is _____. (20, 30, 10)

d. Six hundred ninety is _____. (619 , 690, 609)

e. 15 children came for party , 7 were boys .

How many girls were there? _____ girls. (8 , 22 , 7)

II Fill in the blanks.

[1x 5 = 5]

a. $14 + 6 = \square$

b. $80 + 70 = \square + 5$.

c. Take away 25 from 50 \square

d. I am 2 less than 728. Who am I ? \square

e. Arya made 68 dolls , Tanish made 86 dolls . Who made more dolls ? \square

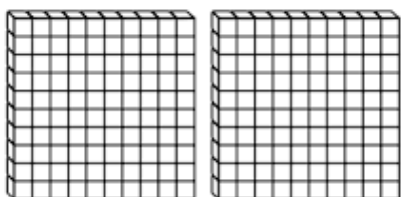
III Do as directed .

[2x 6 = 12]

a. Count hundreds and tens then write the number and the number name.



= _____.



Number name

_____.

b. Add.

	T	O	
	2	9	
+	4	6	

c. Compare the numbers and fill in the box with suitable symbol $<$, $>$, $=$.

i) 663 636

ii) 323 423

d. Write the following numbers in increasing and decreasing order.
835 , 385 , 853

i) Increasing order _____

ii) Decreasing order _____

e. Use the number family { 9, 7, 16 } and complete.

$$9 + 7 = \square$$

$$\square + 9 = 16$$

$$16 - 7 = \square$$

$$16 - \square = 7$$

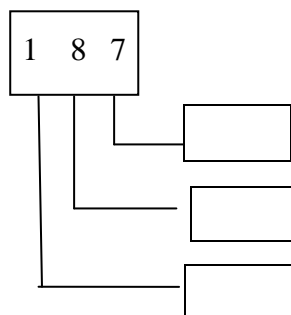
f. Complete the pattern.

126 , 136 , 146 , _____ , _____ , _____ , _____ .

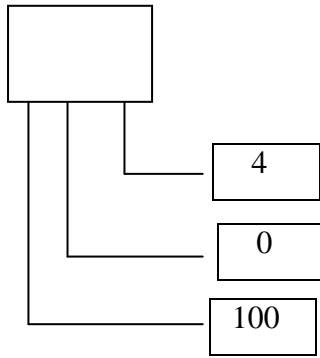
IV Solve the following.

[3x 5 = 15]

a. i) Fill in the place value.



ii) Form the number.



b. Write the number as per the place value and add.

$$560 + 32 + 7 .$$

	H	T	O
+			

c. Kevin bought 56 pots. His mother bought 49 pots. How many pots are there in all ?

	H	T	O

	-			
--	---	--	--	--

d. Solve the following and write the answer in descending order.

i)	T O	ii)	T O	iii)	T O																		
	<table border="1" style="border-collapse: collapse; text-align: center;"> <tr><td style="width: 30px; height: 30px;">2</td><td style="width: 30px; height: 30px;">9</td></tr> <tr><td style="width: 30px; height: 30px;">1</td><td style="width: 30px; height: 30px;">6</td></tr> <tr><td style="width: 30px; height: 30px;"></td><td style="width: 30px; height: 30px;"></td></tr> </table>	2	9	1	6				<table border="1" style="border-collapse: collapse; text-align: center;"> <tr><td style="width: 30px; height: 30px;">1</td><td style="width: 30px; height: 30px;">7</td></tr> <tr><td style="width: 30px; height: 30px;"></td><td style="width: 30px; height: 30px;">8</td></tr> <tr><td style="width: 30px; height: 30px;"></td><td style="width: 30px; height: 30px;"></td></tr> </table>	1	7		8				<table border="1" style="border-collapse: collapse; text-align: center;"> <tr><td style="width: 30px; height: 30px;">4</td><td style="width: 30px; height: 30px;">4</td></tr> <tr><td style="width: 30px; height: 30px;">2</td><td style="width: 30px; height: 30px;">5</td></tr> <tr><td style="width: 30px; height: 30px;"></td><td style="width: 30px; height: 30px;"></td></tr> </table>	4	4	2	5		
2	9																						
1	6																						
1	7																						
	8																						
4	4																						
2	5																						
	<table style="border-collapse: collapse;"> <tr> <td style="border: 1px solid black; width: 20px; height: 20px; text-align: center;">-</td> <td style="padding: 0 10px;"></td> </tr> </table>	-			<table style="border-collapse: collapse;"> <tr> <td style="border: 1px solid black; width: 20px; height: 20px; text-align: center;">-</td> <td style="padding: 0 10px;"></td> </tr> </table>	-			<table style="border-collapse: collapse;"> <tr> <td style="border: 1px solid black; width: 20px; height: 20px; text-align: center;">-</td> <td style="padding: 0 10px;"></td> </tr> </table>	-													
-																							
-																							
-																							

Descending order _____ , _____ , _____ .

e. On Dora's birthday she got 98 gift boxes. She opened 39 boxes.

How many boxes she has to open yet ?

	H	T	O
□			

V Do as directed .

[2 x 4= 8]

a) Add the following.

i)

	H	T	O
	4	6	2
□ +	2	2	7

ii)

	H	T	O
	8	5	5
□ +		4	4

b) Subtract the following .

i)

	H	T	O
	5	2	7
□ -	3	0	7

ii)

	H	T	O
	3	7	6
□ -	1	6	2

VI Read the below table and answer the following.

[1 x 5 = 5]

Number of Boxes	Number of chocolates
Red	14
Blue	22
Orange	10
Pink	30
Green	8

a) How many chocolates are there in pink box?

_____.

b) How many boxes are there altogether ?

_____.

c) Which two colour boxes together makes 18 chocolates in number ?

_____.

d) How many chocolates are there in red and green boxes together ?

_____.

e) Which is the box that has more than 20 and less than 30 chocolates?

_____.