

BGS NATIONAL PUBLIC SCHOOL

Hulimavu, Bannerghatta Road, Bangalore-76

Periodic Test - 1

Subject : COMPUTER SCIENCE

Name : _____

Date : _____

Class I / Section _____

Roll No : _____

Time: 1 hour 15 min

Max Marks : 25

I. Write the missing letter:

($\frac{1}{2} \times 6=3$)

a. C _ _ M P U T _ _ R

b. M _ _ C H I _ _ E

c. D E _ _ K T O _ _

II. Fill in the blanks:

(1X5=5)

tired, machine, man, mobile, computer

a. Machines are _____ made things.

b. A _____ is a smart machine.

c. A bus is a _____ which helps us to move from one place to another.

d. A _____ phone is also a type of a computer.

e. A computer never gets _____.

III. Write True or False:

(1X5=5)

a. ATM is found inside the house.

b. A laptop should be kept in one place.


c. A computer works very fast.

d. Train is a machine.

e. Nature made the computer machine.

IV. Circle the machines that need electricity to work.


(1X2=2)






V. Identify the pictures of the machines and encircle them in the word box.

Colour the pictures:

(1X4=4)



F	T	L	C	A	R
A	R	E	O	E	A
N	U	G	M	L	P
E	C	A	P	E	S
T	K	O	U	P	X
S	H	I	P	H	M



VI. Write one use of each of the following machines: (1X2=2)

a. Laptop(Computer)

b. Geyser (Water heater)

VII. Answer the following: (2X2=4)

a. Write any two good manners to be followed in a computer lab.

b. Write two advantages of using a computer.
