

BGS NATIONAL PUBLIC SCHOOL

HULIMAVU, BANGALORE-76

Periodic Test - 1

Subject: Environmental Studies

Name: _____

Roll No. _____

Class II / Section: _____

Date: _____

Time: 1 Hour 15 minutes

Total Marks: 25

I. Choose the correct option from the following.

$\frac{1}{2} \times 6 = 3$

1. We use Jute fibre to make _____.
a. mats b. gum c. rubber d. oil.
2. We get oil from all the following plants except _____.
a. Coconut b. Mustard c. Groundnut d. Peach
3. Which of these is a plant with trunk? _____.
a. Tea b. Cotton c. Neem d. Bean
4. Which of these is a root of the plant? _____.
a. Potato b. Radish c. Ginger d. Onion
5. Ram likes to eat Broccoli. Which part of the plant does it come from? _____.
a. leaves b. flower c. stem d. seed.
6. Which of these plants will live only for few months? _____.
a. Mint b. Mango c. Fir d. Bougainvillea

II. Who am I?

$\frac{1}{2} \times 6 = 3$

1. I need the support of a wall or another plant to climb up. _____
2. I am the biggest herb and have a soft green stem _____
3. I am a type of a plant. I have hard and thin stems and not very tall. _____
4. I am used for making chocolates. I am made from the seeds of cacao tree. _____
5. I am made from flower petals. I have a sweet smell. _____
6. The food for baby plants is stored in me. _____



III. Think and answer.

$2 \times 3 = 6$

1. Geeta is a very intelligent girl. She always asks questions to her teachers, parents and friends and learns more. She has few questions for you too. Kindly help her to know more.
a. Geeta's mother uses oil for cooking. She wants to know how we get oil.

- b. Her brother was sticking a family photo in his scrapbook. He used gum to stick the photo. Can you tell her from which tree do we get gum?


2. Raju has a homework given by his teacher. He must identify different types of plants. Can you help Raju to write whether they are Herbs, Shrubs, Trees and Climbers?




a. _____ b. _____ c. _____ d. _____

3. Plants store food in different parts. Look at the below picture and write in which part of the plant the food is stored?

a.



b.



c.



d.



IV. Circle the word as per the hint given below.

$$\frac{1}{2} \times 4 = 2$$

Q	W	E	R	T	B	Y	U	I	O
S	B	V	S	D	E	R	G	U	P
P	O	X	Y	G	E	N	D	H	J
I	H	L	E	T	T	U	C	E	J
N	Y	U	I	O	R	W	E	R	T
A	R	G	U	P	O	B	V	S	D
C	W	E	R	T	O	W	E	R	T
H	B	V	S	D	T	B	V	S	D

- a. We need for breathing:

- b. It is a reddish root:

- c. It is used in salads:

- d. It is a herb.

V. Answer the following questions.

2 × 3 = 6

1. Name any two plants that give us -

a. Medicines: _____

b. Fibres: _____

2. How is a mango tree different from a cotton plant?

3. Why it is very important to have plant around us?

VI. Value based question.

1 × 1 = 1

1. **Ramu has a habit of tearing papers from his books. What would you like to tell Ramu and why?**

VII. Answer the following questions and label the parts of the tree.

4 × 1 = 4

A. It is mostly green in colour: _____

B. Wood comes from this part of a tree. _____

C. It spreads and holds flowers and fruits: _____

D. This part is not seen in the picture. It grows below the soil. _____

(Complete the picture by drawing the missing part.)

