

BGS NATIONAL PUBLIC SCHOOL

Hulimavu, Bannerghatta Road, Bangalore-76

Periodic Test - 1

Subject : MATHEMATICS

Name : _____

Date : 24 July-2017

Class I / Section _____

Roll No : _____


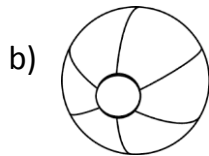

Time: 1 hour 15 min

Max Marks : 25

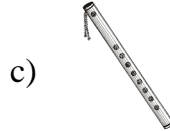
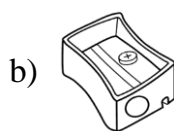

I. Choose the correct answer:


(1 × 5 = 5)

1. Circle the object that slide.



2. Circle the object that rolls.



3.  Gift box has the shape of _____

a) Square

b) Rectangle

c) Triangle

d) Circle


4. A ball, a globe and a woolen ball belongs to _____ .

a) square

b) triangle

c) rectangle

d) circle

5. How many circles are there? _____ 

a) 4


b) 10

c) 3

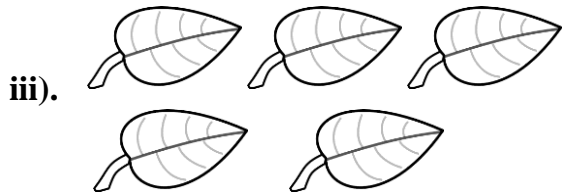
d) 2

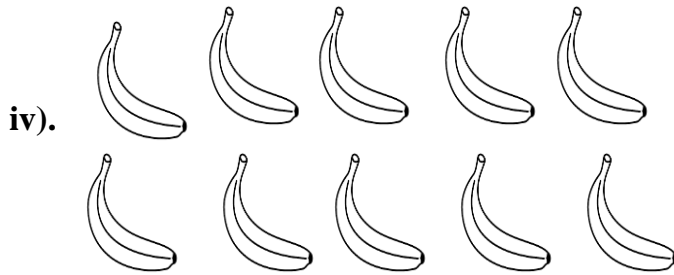
II. Count the objects and write the number and number name:


(1 × 5 = 5)

i)  _____

ii)  _____

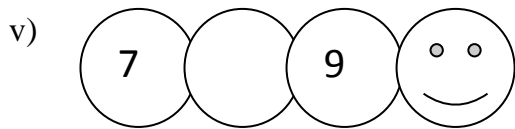
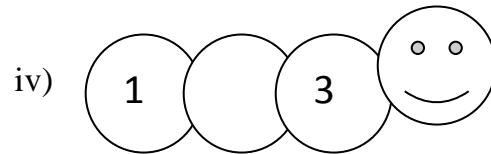
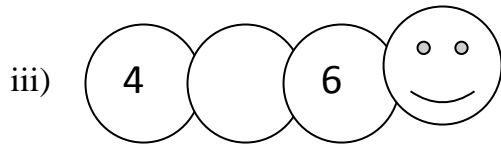
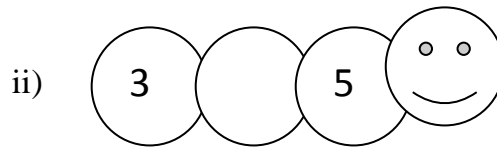
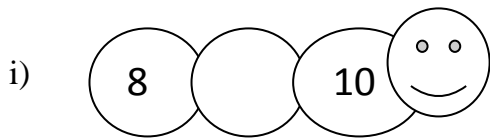






III. Write the missing numbers:

(1 × 5 = 5)



IV. Write the number name:

(1 × 5 = 5)

9 - _____

2 - _____

8 - _____


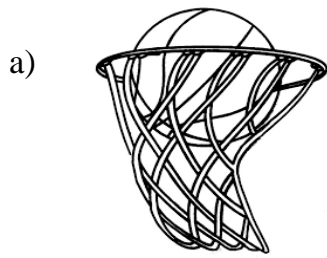
5 - _____

6 - _____


V. Do as directed:

(1 × 5 = 5)

1. Colour the inside object.



2. Colour the biggest butterfly




3. Draw a bird above the tree.



4. Write the position of an apple.(on/ below/ under)

_____ the table.



5. Colour the tree nearest to the bird.

