

BGS NATIONAL PUBLIC SCHOOL

Hulimavu, Bannerghatta Road, Bangalore-76

Half Yearly Examination

Subject : Environmental Science

Name : _____

Date : 12.10.2017

Class III / Section _____

Time: 2 hour 15 mins

Roll No : _____

Max Marks : 50





I Fill in the blanks .

1 x 6 = 6

1. Mr.Ananth and Mrs.Priya are Hari's grandparents. Mrs.Priya is Hari's _____.
2. A _____ is a temporary house made of cloth.
3. The change of water into water vapour is called _____.
4. Flesh eating birds have very sharp and curved claws called _____.
5. The type of house built in places receiving heavy rain fall is _____.
6. Our aunt's and uncles' children are our _____.

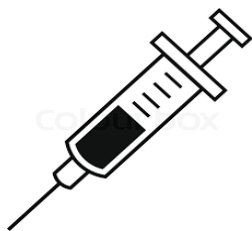
II. Match the following and fill in the blanks

1 x 4 = 4

	<p>a) Eskimos live in this type of house.</p> <p>_____</p> <p>b) A type of house used in places where there are big lakes and rivers</p> <p>_____</p>	
	<p>c) This type of food give us strength to fight diseases.</p> <p>_____</p> <p>d) This type of food is necessary for the growth of our body</p> <p>_____</p>	

III. Observe the picture and write the appropriate sense organ.

1 x 3 = 3







IV. Choose the correct option and put a ✓ for the right answer.

1 x 10 = 10

1. Seema and Reema are siblings. Raani is their cousin. Mr. Shanker is Reema's father. What is the relationship between Mr. Shanker and Raani ?

- a) Mr. Shanker is Raani's uncle
- b) Mr. Shanker is Raani's father.
- c) Raani is Mr. Shanker's granddaughter.
- d) Raani is Mr. Shanker's sister.

2. Which of these is not surface water?


- a) Sea water
- b) River water
- c) Well water
- d) Lake water

3. Which of the following house is a kutcha house?



4. Which of these birds have webbed feet?

a)



b)



c)



d)



5) Observe the person in the given picture. He wanted to cook yummy noodles. Which room he would go,

a) Bed room

b) Living room



c) Kitchen

d) Bathroom

6) Ridhi ran to open the door when her father rang the bell. She used her sense of

a) Sense of hearing and sight. b) Sense of Hearing and smell.

c) Sense of Touch and see. d) Sense of sight and hearing.

7)



I am fond of sports and would like to become a sports person when I grow up

What should he include in his diet to develop strong muscles required to become a sportsperson?

a) Sweets and rice

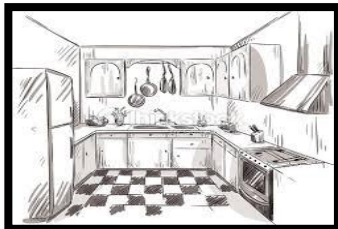
b) Eggs and pulses

c) Jaggery and fruits


d) Potato and butter

8) The things shown in the box 'X' can be found in which of these rooms of the house?


a)



b)



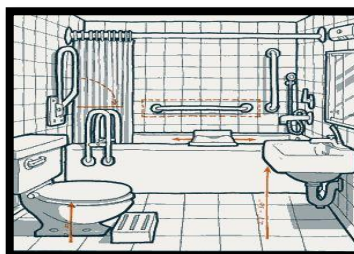
Box 'X'



c)



d)



9) Which of these following will NOT be sensed by the respective person?

a)




b)



c)



d)



10. Which one of the following birds has long and pointed beak?

a) Owl

b) Humming bird

c) Parrot

d) Peacock

V. Answer the following questions.

2 x 6 = 12

1) We are advised not to waste water. Write four uses of water which makes it precious for us.

2) Which is our first school? Why?

3) Why do we need food? Where do we get food from?

4) How is a bird's body suitable for flying?

5) How do we keep our house clean?

6) How can we make water safe for drinking?

VI. Do as directed.

2 x 4 = 8

1) **Who am I ?**

a) Dead animals I do eat, making places clean and neat. I can fly high up in the sky.

_____ is what I am called by.

b) On my head I have a crest, all say I dance the best, I am proud of my feathers, I cry aloud before the rain. I am a _____.

2) **Write any one main function of beak in the following birds.**





3) Ramu has a brother Raju. He can not speak and hear. Can you help Ramu to understand what his brother is trying to say through his actions.







If you meet a person who cannot speak and hear in a restaurant and shows through his actions that he is hungry. How would you help him?

4. Circle the odd one out and give reason to support your answer.


a) lizard ants cockroaches pet dog.

b) bricks cement grass iron rods

VII Look at the picture given below and fill in the blanks and also label the part of a bird .

1 x 4 = 4

- Birds have these instead of teeth. _____
- This keeps the bird warm. _____
- This helps the bird to perch, catch the prey. _____
- When birds perch this part helps them to balance. _____



VIII. Think and answer the following question.

1 x 3 =3

Sagar sees a pigeon in his courtyard struggling to fly as its claws are caught in a net trap.Sagar runs and releases the trap.

a) Is pigeon a perching or preying bird ?

b) What type of beak a pigeon has? (Short, hard, pointed beak or long, thin, pointed beak)

b) Do you think Sagar did a good job? Why?
