

BGS NATIONAL PUBLIC SCHOOL

Hulimavu, Bannerghatta Road, Bangalore-76

Half Yearly Examination

Subject : ENVIRONMENTAL STUDIES

Name : _____

Date : 5.10.2017

Class II / Section _____

Time: 2hour 15 mins

Roll No : _____

Max Marks : 50

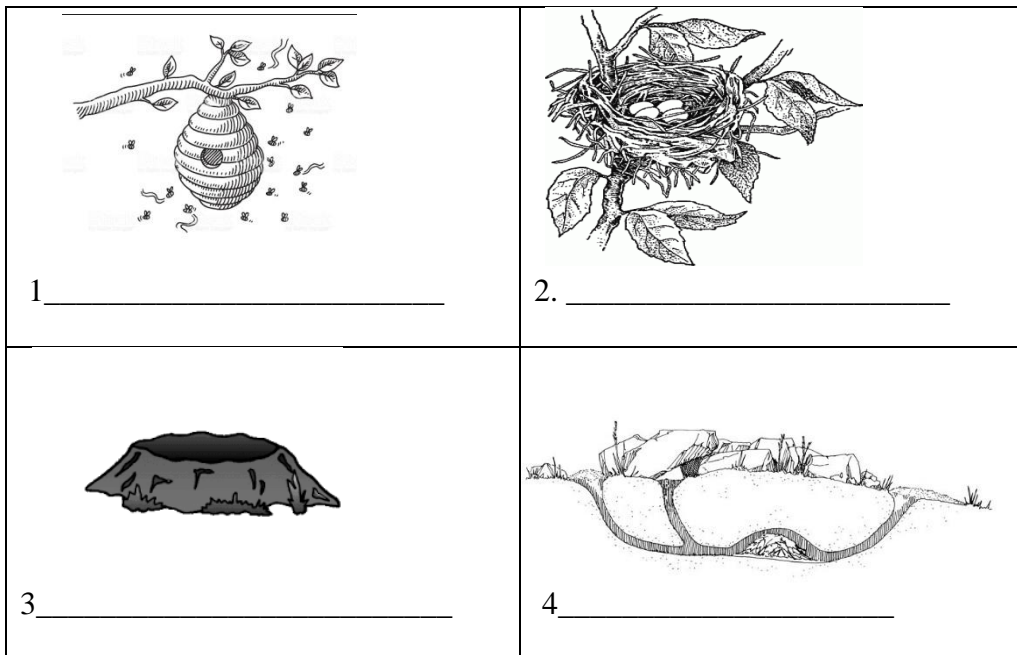
I. Fill in the blanks.

(1X6=6M)

- 1) Flesh eating animals have sharp _____ and _____ to tear the flesh of animals.
- 2) Kites cannot fly if there is no _____.
- 3) The tiny harmful living things that make us fall sick are called _____.
- 4) We keep _____ animals in our houses or farms.
- 5) Moving air is called _____.
- 6) Elephants use their _____ to get food.

II. Identify the picture and write the name of animals live in it.

(1X4=4M)



III. Choose the correct option and circle it.

(1X10=10M)

- 1) Air has **oxygen**/carbon dioxide which is necessary for burning.
- 2) Filtration **helps to kill germs in present water** /purifying the water.
- 3) Fish use its **fin**/gills to swim.
- 4) Gentle wind is called **breeze**/gale.

- 5) Water changes to ice when it is **heated/kept** in freezer.
- 6) The dirty water containing germs make us **healthy/fall sick**.
- 7) Rhinoceros are killed for their **tusk/horn**.
- 8) A football full of air is **heavier/lighter** than an empty football.
- 9) A dog wags its **tail/ears** when it is happy.
- 10) The animals that keep the jungle clean are called **scavengers/amphibians**.

IV. Who am I?

(1X5=5M)

- 1) I am an animal that can survive without water for several days. I am also called as the ‘ship of the desert’.

- 2) I am the main source of water on earth. I fill rivers,lakes,ponds and streams.

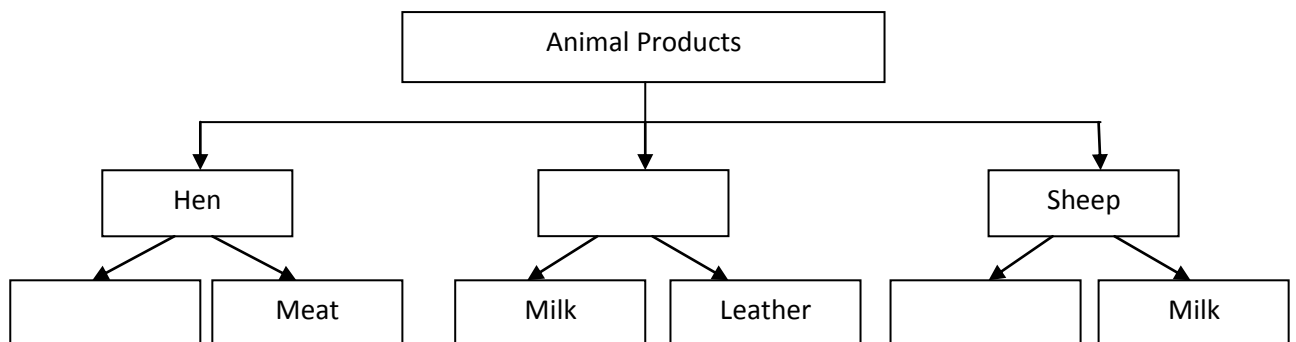
- 3) I am something that you can feel but not see. I can move your hair and clothes.

- 4) I am a bird. But i can’t fly. I live in very cold places. _____

- 5) I am the largest animal on earth and I live in water. I don’t have gills to breathe under water so I come up to breathe.

V. Complete the web chart

(1X3=3M)




VI. Answer the following

(2X6=12M)

1. What will happen if there were no hyenas and vultures in the forest?

2. Observe the picture and answer the questions.




a. Identify the picture: _____

b. What is the use of it?

3. Why is a burning candle put off when covered with a glass?

4. Observe the picture and answer the following questions.



a. When you push a glass upside down into a tub of water, water doesn't enter into the glass. Why?

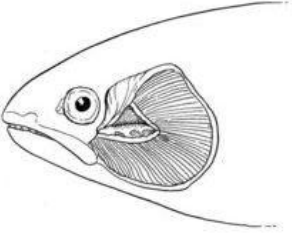




b. If you tilt the glass, you can see bubbles coming out of the glass. Why?

5. Anita's friend gifted her beautiful shoes made of fur. Do you think she should accept the gift? Why?

6. If you have given a chance to choose between two animals, which animal would you choose to keep at your home? Why?


VII. Identify the picture and match the following:

(1X5=5 M)

<p>1.</p> 	<p>Bees make this. It is sweet in taste.</p>
<p>2.</p> 	<p>Process that helps to kill germs in water.</p>
<p>3.</p> 	<p>It helps fish to breathe under water.</p>
<p>4.</p> 	<p>Tallest animal on earth.</p>
<p>5.</p> 	<p>A flesh eating animal.</p>

VIII. Do as directed

(1X5=5 M)



- a) The one which has the ability to prepare food by itself. _____
- b) What would deer be called? _____
(prey animal, endangered animal, domestic animal, pet animal)

2) Radha put her clothes on the clothesline outside for drying. In a hurry she forgot to put the cloth clips. When Radha's mom came to collect them, she found them lying on the ground.

- a) What do you think happened?

- b) How was the weather that day?

3) Most of desert animals hunt at night. Why?

4) Ramu finds a sparrow coming to his garden everyday with some cotton or twigs in its beak. What do you think the bird is preparing for?

5) Observe the picture and answer the following.

- a) Identify the process

- b) What are the materials used?

