

# BGS National Public School

Hulimavu, Bannerghatta Road, Bangalore – 76

**Annual Examination (March 2018)**

**Subject: ENVIRONMENTAL SCIENCE**

Name : \_\_\_\_\_

Roll No. \_\_\_\_\_

Class: III Section : \_\_\_\_\_

Date : \_\_\_\_\_

**Time: 2 Hour 30 min**

**Max Marks: 50**

**General Instructions:**

- Read the question well before answering and attempt all questions.
- Follow the numbering as exactly as given in the question paper.
- Write the answers legibly and neatly.
- Support your answers with diagrams wherever necessary.

**I. Choose the correct option for the following.**

**1 X 5 = 5**

1. Pointing to an old photograph Ram said, “He is the brother of my uncle’s first daughter”  
How is Ram related to that boy?

- a. Cousin                      b. Nephew                      c. Uncle                      d .Brother.

2. Names of 3 types of houses are hidden in the puzzle and select the house whose name is NOT hidden in the puzzle.

a.



b.



H				B		T
T						N

c.



d.



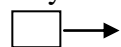
3. Which is the slowest means of communication?

- a. Postcard                      b. Telephone                      c. Telegram                      d E-mails

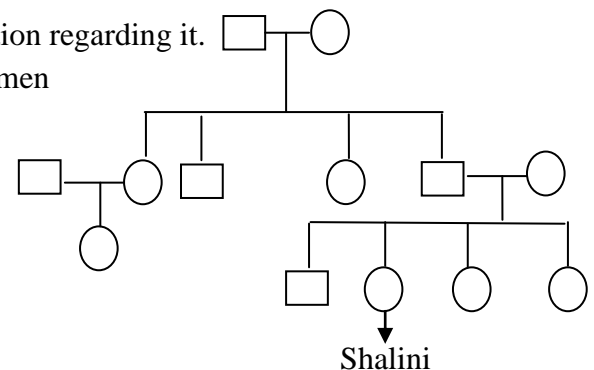
4. Which option shows only the indoor activities?

- a. ludo ,carom,cycling                      b.chess, table tennis,cricket  
c.football, watching T.V,dancing                      d.carrom,chess,table tennis

5. Study the given family of Shalini. Select the correct option regarding it.



- a. Shalini has two cousins  
b. Shalini has two elder brother and one younger sister.  
c. Among the two aunts of Shalini , only one is married  
d. Shalini’s grandfather has 3 daughters and one son



**II. Fill in the blanks.**

**1 X 3 = 3**

1. The clay is shaped in to a pot on a \_\_\_\_\_.
2. Telephone was invented by \_\_\_\_\_
3. The full form of PIN code is \_\_\_\_\_

**III. Who am I ?**



**1 X 4 = 4**

- 1 I am a device that permits two or more users to conduct a conversation when they are too far apart to be heard directly. Who am I? \_\_\_\_\_
2. I am a red coloured physical box into which members of the public can deposit outgoing mail. Who am I? \_\_\_\_\_.
3. I am a hot furnace. Clay pots are baked in me to make it harder and durable. Who am I? \_\_\_\_\_
4. I am your father's mother. How am I related to you? \_\_\_\_\_.

**IV. Circle the odd one out and give reason for your choice.**

**1 X 4 = 4**

1.



\_\_\_\_\_

2. email address , stamp , postcard , pin code.

\_\_\_\_\_


3.



**A**



**B**



**C**



**D**

\_\_\_\_\_

\_\_\_\_\_

\_\_\_\_\_

4. Computer games , chess, badminton, kho-kho

\_\_\_\_\_

V. Give scientific reason for the following.

1 X 5 = 5

1. Clay is used to make pots instead of sand.

---

---

---

2. Games are very important for us..

---

---

---

3. In Rajasthan most of the houses are made of mud with a roof of thorny bushes

---

---

---

4. Igloos are dome in shape

---

---

---

5. A lion has very sharp teeth.

---

---

VI. Complete the analogy.

1 x 2 = 2

1.



: \_\_\_\_\_ ::



: badminton

2.



: prey :



: \_\_\_\_\_

**VII. Answer the following questions**

**2 x 6 = 12**

1. What is meant by “chewing of cud”?

---

---

---

---

2. What is a family? How the family members should be in a family?

---

---

---

3. What are the important things need to be followed while sending a letter to different places?

---

---

---

4. What are indoor and outdoor games. Give two examples for each.

---

---

---

---

---

---

---

5. You want sunlight and fresh air to come in your house, but you want to keep insects out. How will you do this?

---

---

---

---

---


---

---

6. Identify the pictures A and B. Write the type of family and differentiate between A and B



Picture A



Picture B

---



---



---



---




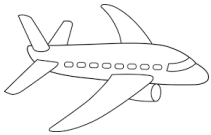



---

**VIII. Do as directed**

**2 x 5 = 10**








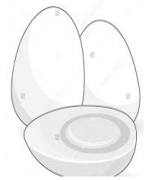
1. Find out which word the following pictures says. The first letter of each word will help you.

a.

				
<input type="text"/>	<input type="text"/>	<input type="text"/>	<input type="text"/>	<input type="text"/>

a. \_\_\_\_\_

b.

							
<input type="text"/>	<input type="text"/>	<input type="text"/>	<input type="text"/>	<input type="text"/>	<input type="text"/>	<input type="text"/>	<input type="text"/>

b. \_\_\_\_\_

2. Think and answer

a. Sonu's dog is not eating since 2- 3 days. Sonu is worried. What would you suggest him?

---



---



---

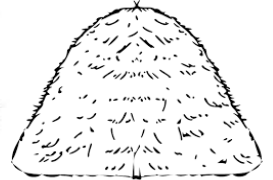
b. The recipient phone number is written below the address for speed post and courier. Why?

---

---

---

3. Identify and list out the materials required to built a pucca house. How does these materials help?



1. \_\_\_\_\_ 2. \_\_\_\_\_ 3. \_\_\_\_\_ 4. \_\_\_\_\_

---

---

4. In what way is each of the following organs are useful to the animals?

a. Long tongue of a frog \_\_\_\_\_.

b. Tail to a monkey. \_\_\_\_\_.

5. Give two examples.

a. Games which require a large open area. \_\_\_\_\_

b. Games in which no playing materials are required besides the players \_\_\_\_\_

IX 1. Identify the picture and answer the following questions.

$$2\frac{1}{2} \times 2 = 5$$

a. This is a \_\_\_\_\_ house.

b. Where can you find such houses? Why?

---

---

---

---



2. Observe the picture and write the steps involved in making pots.



1. \_\_\_\_\_
2. \_\_\_\_\_
3. \_\_\_\_\_
4. \_\_\_\_\_
5. \_\_\_\_\_