

BGS National Public School
Hulimavu, Bannerghatta Road, Bangalore – 76
Annual Examination (March 2018)
Subject: COMPUTER SCIENCE

Name : _____

Roll No. _____

Class: II Section : _____

Date : _____

Time: 2 Hour 30 min

Max Marks: 50

I. Fill in the blanks using the words given below:

[$\frac{1}{2}$ x 6 = 3]

Brushes	Magnifier	Select all	Hard copy	DVD	Delete
----------------	------------------	-------------------	------------------	------------	---------------

1. Printouts are also known as _____
2. We use the _____ option to select the entire picture.
3. _____ holds more information than CD.
4. We use _____ to draw lines and curves.
5. The _____ key erases a letter or number to the right of the cursor.
6. We use the _____ tool to zoom in on our picture.

II. Choose the correct option for each of the following:

[$\frac{1}{2}$ x 4 = 2]

1. Which option is used to select the background colour?
(a) Color 5 (b) Color 2 (c) color 3 (d) color 4
2. Which of these is also called as Visual Display unit?
(a) Monitor (b) Cabinet (c) Keyboard (d) Mouse
3. Which tool is used to draw shapes with many sides?
(a) Triangle (b) Polygon (c) Rectangle (d) Circle
4. Which key along with other keys can be used to insert special symbols?
(a) Enter (b) Shift (c) Ctrl (d) Delete


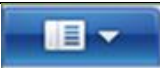




III. State whether the following statements are TRUE or FALSE:

[$\frac{1}{2}$ x 6 = 3]

1. The cursor control keys are also some times called the arrow keys. []
2. Invert selection tool is used to select everything which is not selected currently. []
3. Size tool is used to select the thickness of the line. []
4. UPS contains the brain of the computer. []
5. The full form of CRT is Carbon Ray Tube. []
6. Pen drive is also known as flash drive. []

IV. Match the following:

[$\frac{1}{2} \times 6 = 3$]

Column A	Column B	Match
1. 	a. Compact Disc	
2. 	b. Microphone	
3. 	c. Fill with color tool	
4. 	d. Inkjet	
5. 	e. Paint button	
6. 	f. Text tool	

V. Who am I?

[1 x 6 = 6]

- I have alphabet keys, numeric keys and special keys. _____
- I am a blinking pointer. _____
- I am an output device that displays pictures. _____
- I am a big white area which is used to draw pictures. _____
- I am used to select foreground colour. _____
- I am used to provide power backup. _____

VI. Circle the odd one out:

[$\frac{1}{2} \times 6 = 3$]

- Left-click, Dragging, Typing, Right-click
- Invert selection, Free-form selection, Delete, Select all
- Cabinet, MS Paint, Keyboard, Mouse
- Line tool, Curve tool, Polygon tool, Magnifier tool
- Num lock, Caps lock, Mouse lock, scroll lock
- Color1, color palette, Exit, color2

VII. Write the keyboard shortcut for the following:

[$\frac{1}{2} \times 4 = 2$]

- To Exit from the paint. _____
- To Open New file. _____
- To save a file. _____
- To open an Existing file. _____

VIII. Expand the following:

[1 x 3= 3]

1. DVD : _____
2. TFT : _____
3. CPU : _____

IX. Search the computer related word in the word search:

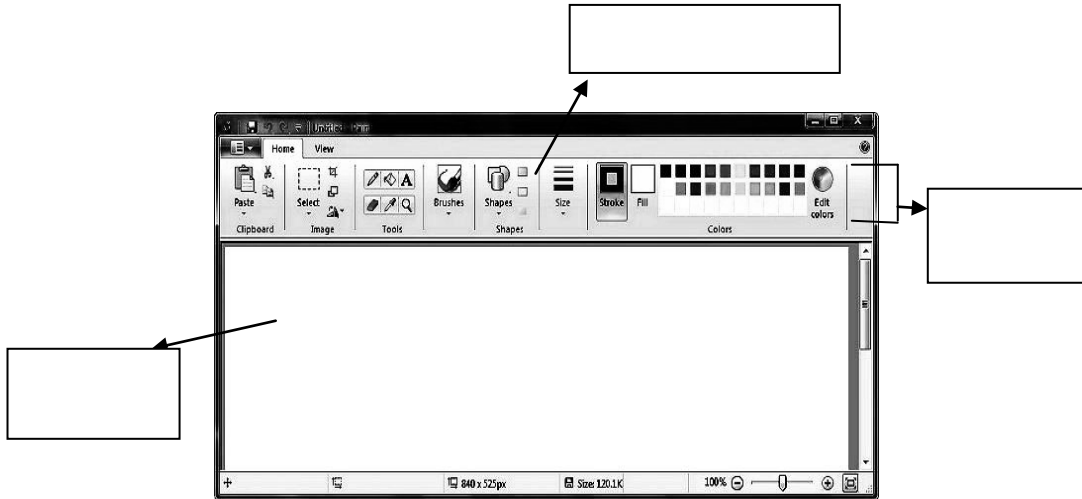
[½ x 4 = 2]

SELECT	PRINTER	BACKSPACE	POLYGON
--------	---------	-----------	---------

P	L	S	T	B	Z	O	V	J	P
O	B	N	U	P	E	R	I	C	R
L	A	S	E	L	E	C	T	O	I
Y	P	N	S	G	Z	R	L	K	N
G	M	N	E	L	W	Z	S	U	T
O	B	A	C	K	S	P	A	C	E
N	N	U	P	E	R	T	E	O	R

X. Label the screen below:

[1x 3=3]



XI. Solve the cross word with the help of hints:

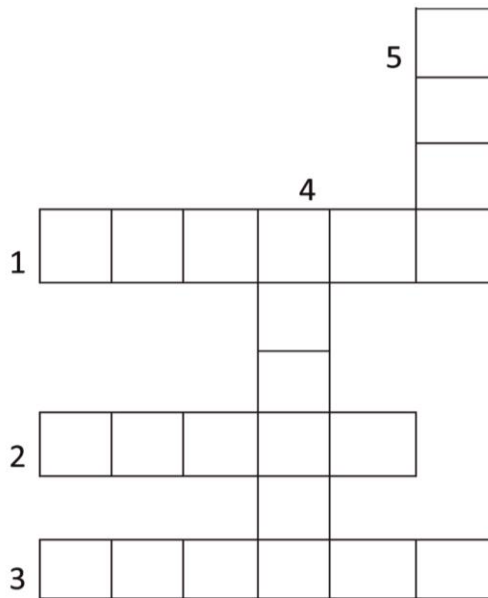
[1x 5 =5]

Across -

1. The tool is used to select different parts of the picture.
2. _____ is used to drag objects on the monitor.
3. This is the most commonly used keyboard.

Down -

4. This tool is used to erase the unwanted parts of the picture.
5. The information on the computer is known as _____ copy.



XII. Colour the following picture according to the instruction:


[1 x 4 =4]

Numpad keys – Red

Cursor control keys – Green



Alphabet keys – Yellow



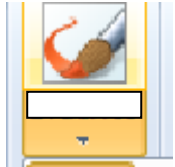
Spacebar key – Blue



XIII. Identify the following pictures and write one line about it:

[1 x 5= 5]

	<p>Picture</p> 	<p>Name: _____</p> <p>_____</p> <p>_____</p>
<p>2.</p>		<p>Name: _____</p> <p>_____</p> <p>_____</p>

3.		Name: _____ _____ _____
4.		Name: _____ _____ _____
5.		Name: _____ _____ _____

XIV. Answer the following:

[2 x 3=6]

1. Write down the steps to open MS Paint.

2. What is a printer? Write the name of any two printers.

3. What is a mouse pointer and cursor?
