

BGS National Public School
Hulimavu, Bannerghatta Road, Bangalore – 76
Annual Examination (March 2018)
Subject: ENVIRONMENTAL SCIENCE

Name : _____

Roll No. _____

Class: I Section : _____

Date : _____

Time: 2 Hour 15 min

Max Marks: 50

I. Choose the correct option. (1x5=5)

1. Which of these materials allows you to see things through it?
a) Metal b) Glass c) Rubber

2. Which of these is a good habit?
a) Pushing your friend b) Getting up early in the morning c) Shouting

3. You should brush your teeth
a) Once a week b) everyday c) every two days

4. You can feel the touch only on your
a) skin b) hair c) fingernails

5. Which one of the following thing we should not follow ?
a) Use zebra crossing b) run on the footpath c) Follow traffic signals

II. Fill in the blanks (1x3=3)

1. We must _____ our mouth after each meal.

2. If you play with matchbox , you may start a _____.

3. When you hear loud and unpleasant sounds you block your _____.

III. Who am I? (1x5=5)

1. I am soft and stretchable. _____

2. People use me early in the morning to clean their teeth. _____

3. Children drink me early in the morning and I am white in color. _____

4. I can help you to taste different types of food. _____

5. I am a light and vehicles stop when they see me. _____

IV. Tick the odd one out and give reason for your choice.

(1x4=4)

1. Eraser, tyre, bench, rubber-band

2. Soap, brush, towel, water, pipe

3. Eggs, apple, meat, fish, milk

4. Eyes, nose, tongue, skin, hair

V. Give scientific reason for the following statements:

(1x5=5)

1. We cannot use clothes made of paper.

2. We should not study whole night during exam.

3. We should follow traffic signals.

4. Sapna refuses to eat vegetables and often fall sick.

5. Kunal had to use a handkerchief to cover his nose while passing by the garbage tank.

VI. Answer the following:

(2x6=12)

1. What will happen if spoons are made of rubber?

2. How can you keep your body clean?

a. _____

b. _____

3. What are the two types of food? Give example.

a. _____

b. _____

4. What are sense organs and explain the functions of skin?

5. Write two safety rules that we follow at road?

a. _____




b. _____

6. Why can't you see anything in the dark room?

VII. Do as directed

(2x6=12)

1. Colour the food we get from plants in green and the food we get from animals in red:



2. Write the parts of the body which help us to do the following activities.

a. Watching television _____

b. Hearing songs _____

c. Smelling Rose _____

d. Feeling touch _____

3. What are these things made from?

a.  _____

b.  _____

c.  _____

d.  _____

4. Write the source for the following food items:

a. Eggs _____

b. Mutton _____

c. Milk _____

d. Bread _____

5. Name These:

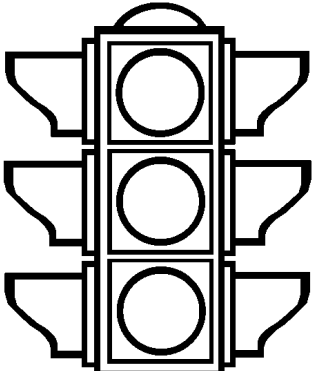
a. Always cross the road using _____

b. Two dangerous things that you should never play with:

1. _____

2. _____

6. Colour the traffic light. What does each colour indicates?

	<p>1. _____</p> <p>2. _____</p> <p>3. _____</p>
---	---

VIII. Draw any two sensory organs and write a function of each;

(1x2=2)

--	--

IX. Identify the following:

(1x2=2)

1. Write yuk for dirty and yum for clean



2. Identify the following picture and write a rule we should follow while using it:



© Can Stock Photo

