

BGS National Public School
Hulimavu, Bannerghatta Road, Bangalore – 76
Annual Examination (March 2018)
Subject: MATHEMATICS

Name : _____

Roll No. _____

Class: II Section : _____

Date : _____

Time: 2 Hour 15 min

Max Marks: 50

I. Fill in the blanks

[1 x 10 = 10]

1. Biggest two digit even number is _____
2. Take away 7 from 38 gives _____
3. A dose of a Syrup is generally measured in _____(L or ml)
4. $23 + \underline{\quad} = 54$
5. $3 \times 8 = \underline{\quad}$
6. The third month of the year is _____
7. $4 + 4 + 4 + 4 = \underline{\quad}$
8. Leap year has _____ days
9. $7 + 6 + 3 = \underline{\quad}$
10. Write the number that is 20 more than 35. _____

II. Match the following

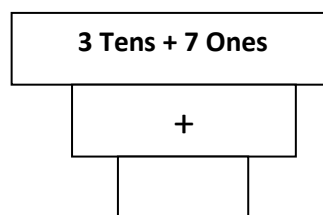
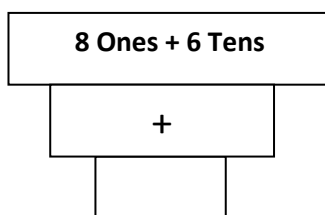
[1 X 5 =5]

A		B		
1	Smallest three digit number	a	14	
2	28-8	b	25	
3	5X5	c	365 Days	
4	One year	d	100	
5	2+3+4+5	e	20	

III. Do as Directed

[2 X 7 = 14]

1. Count the number of Tens and Ones, then write the value of the number and add them.



2. Fill in the missing letters, of the months names..

a. S E _ _ E _ _ E R

b. M _ R _ H

c. J A _ _ _ _ Y

d. F E _ _ _ _ R Y

3. Write the months which has 30 days.

a.	b.
c.	d.

4. Unscramble alphabets for the following:

a) Y D R H T U S A - _____

b) N O M A D Y - _____

5. Write tens and ones for the following numbers

a) 69 = _____ Tens + _____ Ones

b) 48 = _____ Tens + _____ Ones

6. Solve the following:

a.

	8	4
—	5	5

b.

	7	5
+	4	9

c.

		7
X		8

d.

		9
X		6

IV. Solve the following

[3x 7 =21]

1. In the morning, there were 62 Fishes in stoke. In the evening, when shopkeeper counted the fishes he found 39 fishes in stoke.
How many fishes were sold out for the day?

--









2. In a garden there are 40 rose flowers and 67 sunflowers, find the total number of flowers in the garden.

3. There are 7 days in a week. How many days are there in 4 weeks?


4. Nupur collected 47 stamps and Mona collected 85 stamps. How many more stamps did Mona collected?

5. There are 8 children playing in a park. Each child ate 3 toffees. How many toffees were eaten by all?

6. It is Shopping time!! The cost of some items are given below

			
Rs 7	Rs 18	Rs 12	Rs 40
			
Rs 35	Rs 20	Rs 25	Rs 14

Find the total amount spent by Lucky and Happy

Lucky 

Happy 

Lucky bought,

- Bat : _____
- Chocolate : _____
- Strawberry : _____

Total






Happy bought,

- Ice-cream : _____
- Banana : _____
- Apple : _____

Total

7. Shreya wants know about the animals liked by her friends, she asked her friends to choose their favorite wild animals. They made following pictograph to see the results.

One picture of an animal = One student's favorite animal.

Giraffe	
Zebra	
Tiger	
Wolf	
Bear	

Answer the following questions by referring above pictograph

- Which is the most popular animal? _____
- How many students chose a tiger? _____
- What is the difference between the number of students who choose a tiger and number of students who chose zebra? _____